

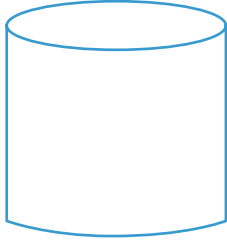


NAME _____ DATE _____

FACES, EDGES AND VERTICES

Write the name of each shape. Also find the number of faces, edges and vertices.

1)



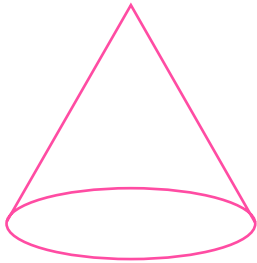
___ vertices.

___ edges.

___ faces.

Name: _____

2)



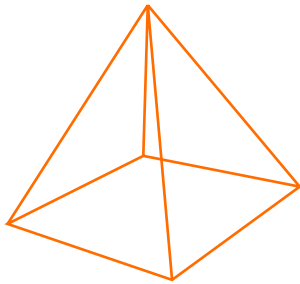
___ faces.

___ edges.

___ vertices.

Name: _____

3)



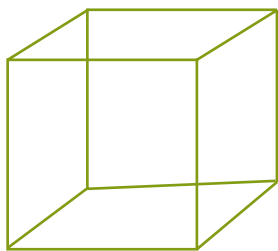
___ faces.

___ edges.

___ vertices.

Name: _____

4)



___ faces.

___ edges.

___ vertices.

Name: _____